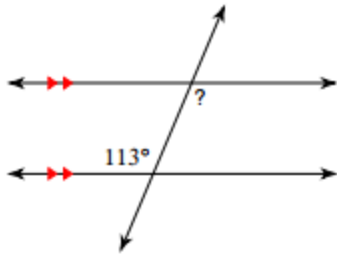


ASSIGNMENT 18

Review:

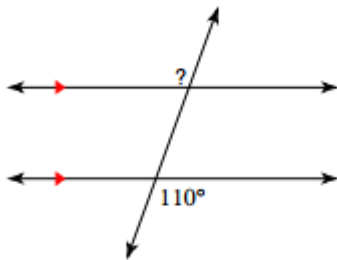
1. Solve for n: $5(n - 8) = -2n + 30$

2.



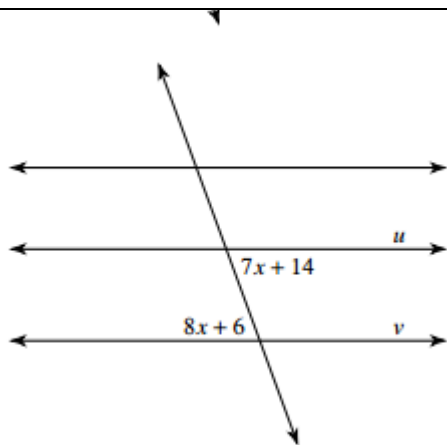
What is the measure of the missing angle in the figure? Explain how you arrived at your answer.

)



3. Miguel said that the missing angle measure in the figure was 110 degrees because it is vertical to the angle measuring 110 degrees. Do you agree? Explain your reasoning.

!



4. Find the measures of the two given angles in the figure, in degrees.