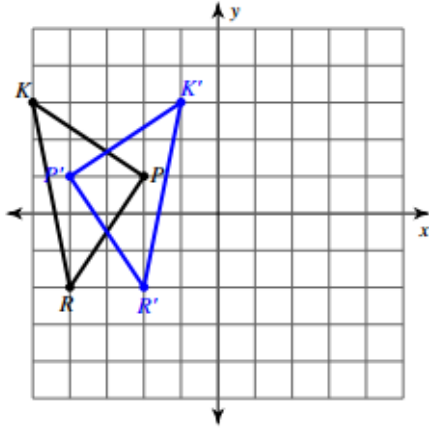


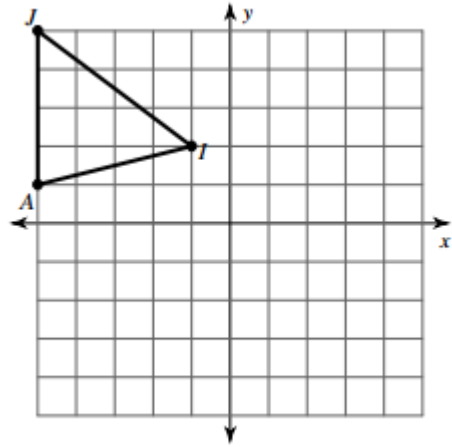
# ASSIGNMENT 16

Review:

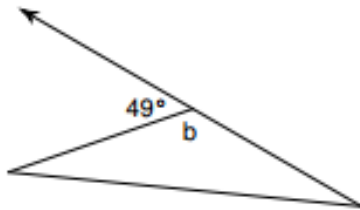
1. Describe the transformation below.



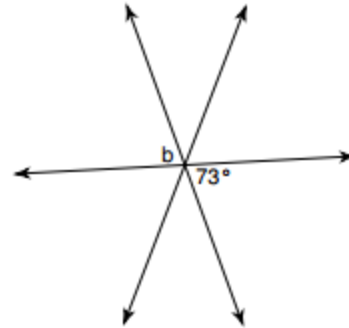
2. Rotate the following figure 90 degrees clockwise:



3. What is the measure of angle b? Explain how you know.



4. What is the measure of angle b? Explain how you know.



5. Challenge: Find the value of x in the picture below. Then explain how you found your answer.

