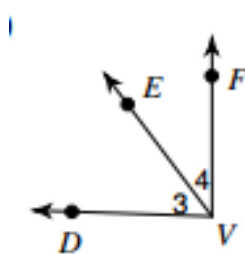
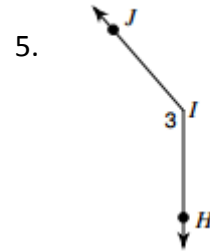
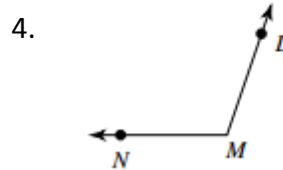
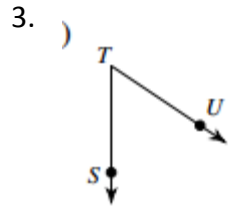


ASSIGNMENT 15

Review:

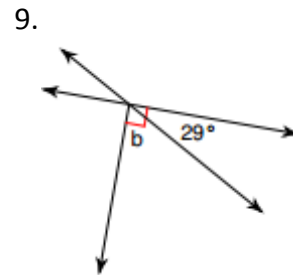
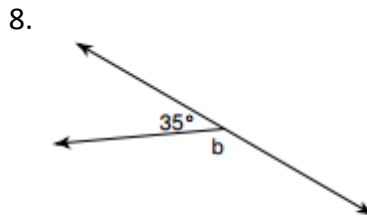
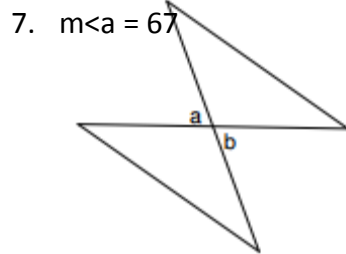
1. Add: - -
2. Find 55% of 90 using a ratio table.

For the following questions, name the given angle in the picture:

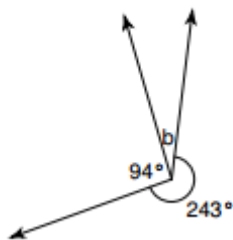


6. In the picture to the left, angles $\angle DEF$ and $\angle EVF$ are **complementary**.
- a) What is another name for angle 3? _____
 - b) What does "**complementary**" mean?
 - c) If the measure of angle $\angle EVF$ is 40 degrees, what is the measure of angle $\angle DEF$?
 - d) Explain how you got your answer in part C.

For each question below, find the missing angle measure b in the picture:



10. Challenge:



- a) What is the measure of angle b ?
- b) Explain how you got your answer. Use at least 3 sentences.