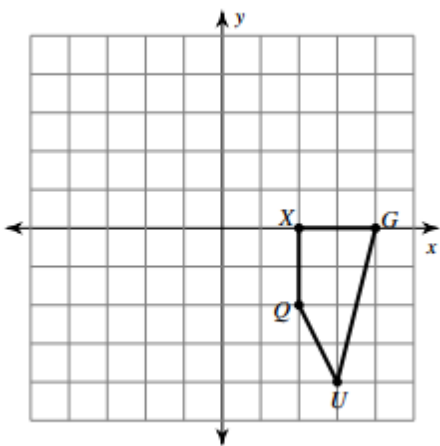


ASSIGNMENT 14

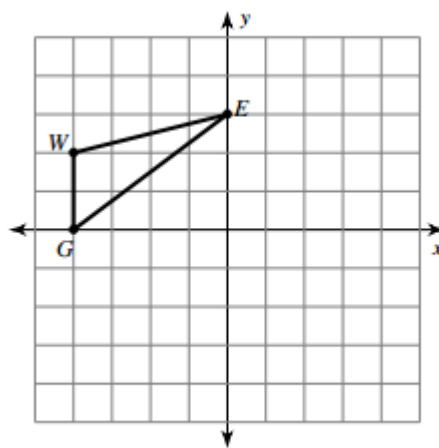
Review:

- LaToya wants a pair of running pants from Modells that originally cost \$39.99. He has two coupons he could possibly use. Coupon A takes 20% off the original price, while coupon B takes \$10 off the original price. Which coupon should she use? Show how you arrived at your answer.
- Mary's basement got flooded. She had $20\frac{3}{4}$ gallons of water in her basement. She was able to pump out $11\frac{1}{6}$ gallons. How many gallons of water are still in her basement?

- Translate the figure below 4 units left and 3 units up.

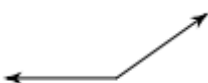


- Reflect the figure below over the y-axis.



For the following angles, tell whether they are obtuse, acute, straight, right, or reflex.

5.



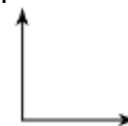
6.



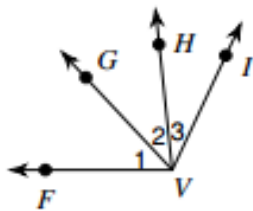
7.



8.



9.



What is another name for angle 1? _____

What is another name for angle 2? _____

What is another name for angle 3? _____

Explain why some people might be confused when naming angles.

ASSIGNMENT 14